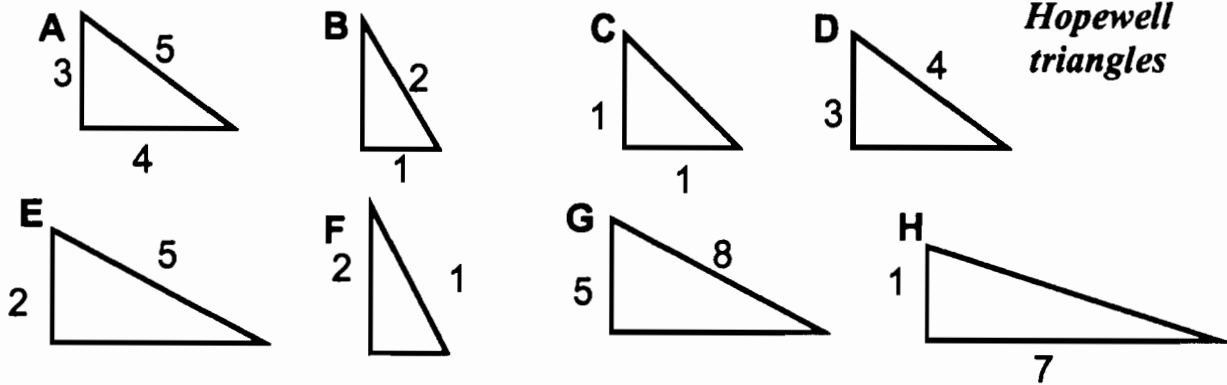


The Hopewell people were Native Americans whose culture flourished in the central Ohio Valley about 2000 years ago.

The Hopewell people constructed earthworks using right triangles, including those below.



1. What is the length of the hypotenuse of Triangle H?

Give your answer correct to one decimal place.

Show your calculations.

$$1^2 + 7^2 = 50$$

$$\sqrt{50} \approx 7.1$$

7.1

2. What is the size of the smallest angle in Triangle A?

Give your answer correct to one decimal place.

Show your calculations.

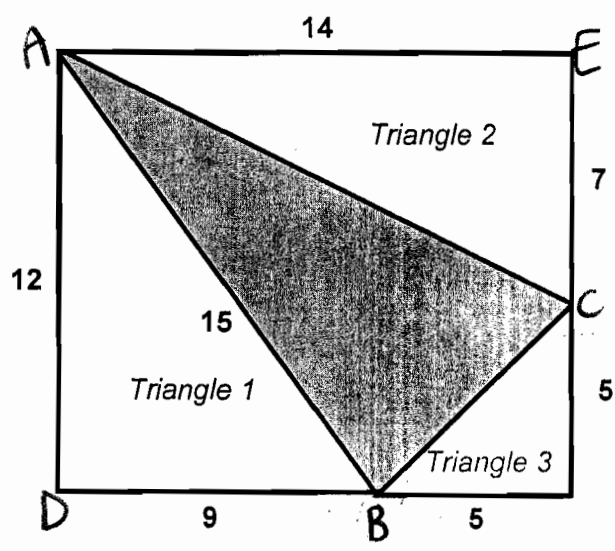
$$\tan x = \frac{3}{4}$$

$$\tan^{-1}\left(\frac{3}{4}\right) = 36.9$$

36.9°

The diagram on the next page shows the layout of some Hopewell earthworks. The centers of the Newark Octagon, the Newark Square and the Great Circle were at the corners of the shaded triangle.

T1



Not drawn to scale

The three right triangles surrounding the shaded triangle form a rectangle measuring 12 units by 14 units.

Each of these three right triangles is similar to one of the Hopewell triangles on the previous page.

For example, Triangle 3 above is similar to Hopewell Triangle C.

3. Which Hopewell triangle is similar to Triangle 1? A

Explain how you decided.

The ratios of the sides were the same.

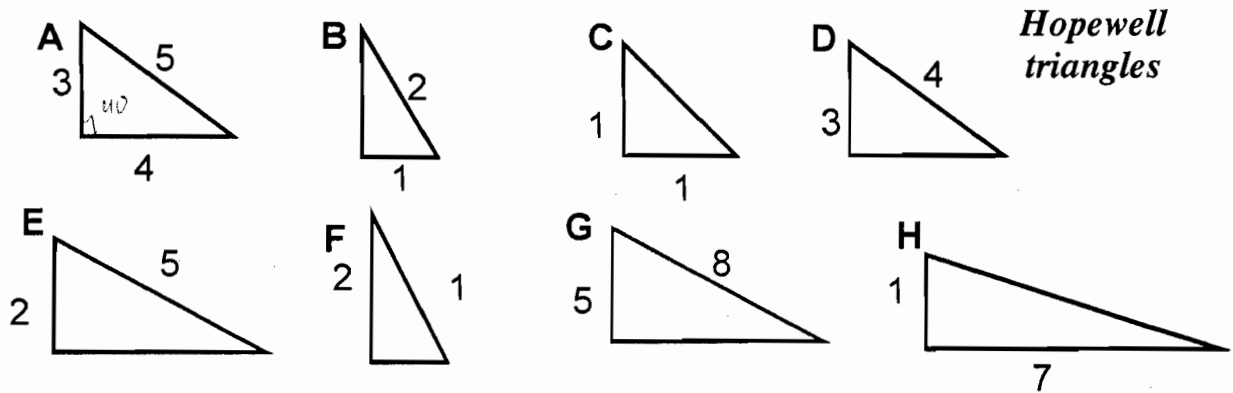
4. Is the shaded triangle a right triangle? No

Prove your answer.

In Triangle 3, the legs are congruent, so it makes a 45°-45°-90° triangle. If ∠ABC were 90°, then ∠ABD should be 45°. However, triangle 1 doesn't have congruent legs. If ∠ACB were 90°, then ∠ACE should be 45°, but triangle 2 doesn't have congruent legs.

The Hopewell people were Native Americans whose culture flourished in the central Ohio Valley about 2000 years ago.

The Hopewell people constructed earthworks using right triangles, including those below.



1. What is the length of the hypotenuse of Triangle H?
Give your answer correct to one decimal place.
Show your calculations.

7.1

$$\sqrt{7^2 + 1^2} = \sqrt{50} \approx 7.1$$

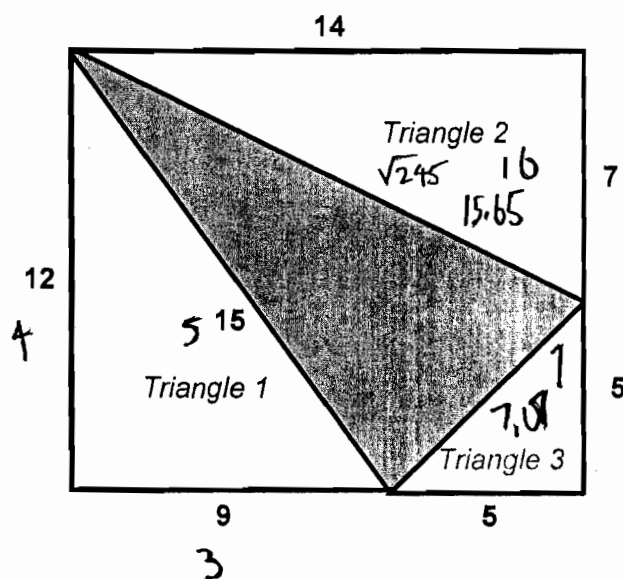
2. What is the size of the smallest angle in Triangle A?
Give your answer correct to one decimal place.
Show your calculations.

36.9°

$$\cos^{-1} (4/5) \approx 36.9$$

calculator

The diagram on the next page shows the layout of some Hopewell earthworks. The centers of the Newark Octagon, the Newark Square and the Great Circle were at the corners of the shaded triangle.



Not drawn to scale

The three right triangles surrounding the shaded triangle form a rectangle measuring 12 units by 14 units.

Each of these three right triangles is similar to one of the Hopewell triangles on the previous page.

For example, Triangle 3 above is similar to Hopewell Triangle C.

3. Which Hopewell triangle is similar to Triangle 1? _____

A

Explain how you decided.

Because I divided all the sides by 3 so it's
3, 4, 5 and that is triangle A.

4. Is the shaded triangle a right triangle? _____

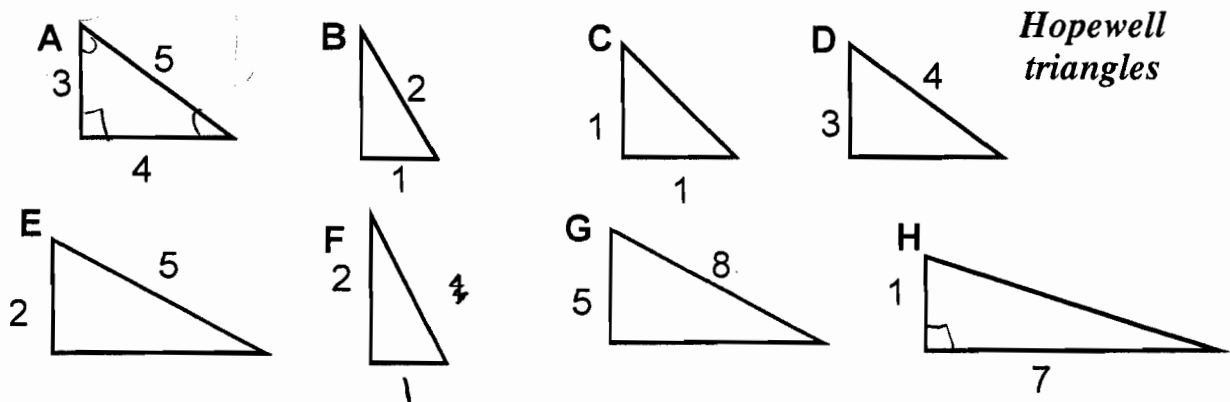
No

Prove your answer.

Triangle 2 is a rt. triangle, But, the hypotenuse of
triangle 3 is $\sqrt{5^2+5^2}$ which is about $7.07 \approx 7$.
So, the shaded must have the other side of 14
to be a rt. triangle.

The Hopewell people were Native Americans whose culture flourished in the central Ohio Valley about 2000 years ago.

The Hopewell people constructed earthworks using right triangles, including those below.



1. What is the length of the hypotenuse of Triangle H?
Give your answer correct to one decimal place.

Show your calculations.

$$1^2 + 7^2 = C^2$$

$$1 + 49 = \sqrt{C^2}$$

7.1

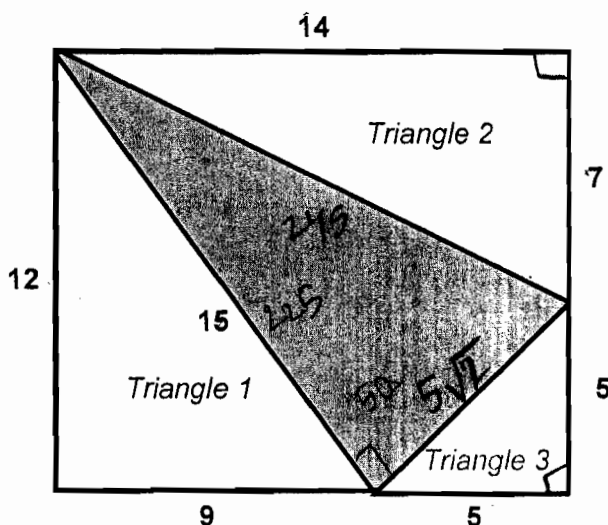
2. What is the size of the smallest angle in Triangle A?
Give your answer correct to one decimal place.

Show your calculations.

$$\frac{3}{5} \sin^{-1}$$

36.9°

The diagram on the next page shows the layout of some Hopewell earthworks. The centers of the Newark Octagon, the Newark Square and the Great Circle were at the corners of the shaded triangle.



Not drawn to scale

The three right triangles surrounding the shaded triangle form a rectangle measuring 12 units by 14 units.

Each of these three right triangles is similar to one of the Hopewell triangles on the previous page.

For example, Triangle 3 above is similar to Hopewell Triangle C.

3. Which Hopewell triangle is similar to Triangle 1?

Triangle A

Explain how you decided.

Triangle A and 1 are both pythagorean
triples. This means they are all real numbers
and when doing $A^2 + B^2 = C^2$, the numbers have no
decimal points or fractions.

4. Is the shaded triangle a right triangle?

NO

Prove your answer.

Hypotenuse of $\Delta 3 = 5^2 + 5^2 = C^2$, $C = 5\sqrt{2}$, $C^2 = 50$
Hypotenuse of $\Delta 2 = 7^2 + 14^2 = C^2$, $C = 15.7$, $C^2 = 245$

if the shaded triangle was a right Δ , then

$$15^2 + 50 \neq 245$$

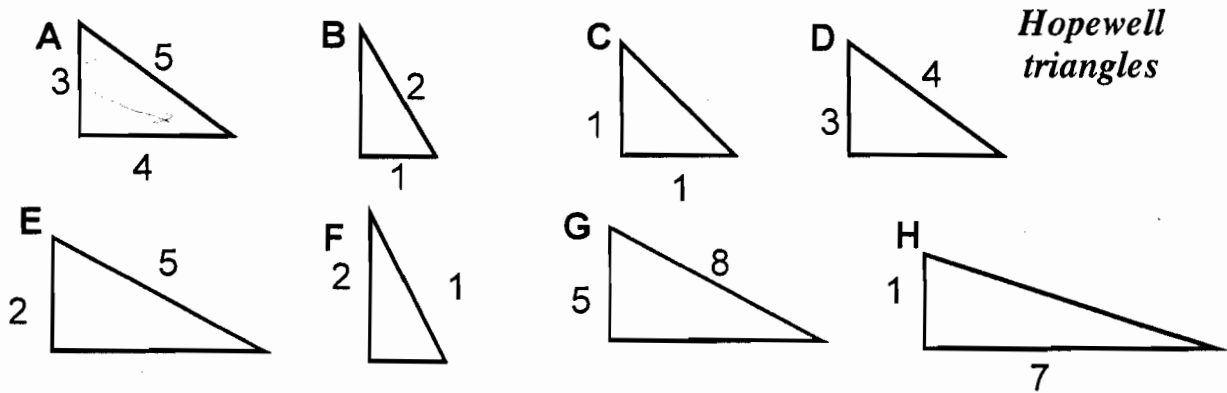
$$225 + 50 \neq 245$$

$$275 \neq 245$$

← since this is not true, it is not a right Δ

The Hopewell people were Native Americans whose culture flourished in the central Ohio Valley about 2000 years ago.

The Hopewell people constructed earthworks using right triangles, including those below.



1. What is the length of the hypotenuse of Triangle H?
Give your answer correct to one decimal place.

Show your calculations.

$$1^2 + 7^2 = c^2$$

$$1 + 49 = c^2$$

$$c^2 = 50$$

$$c = \sqrt{50} \approx 7.1$$

7.1

2. What is the size of the smallest angle in Triangle A?
Give your answer correct to one decimal place.

Show your calculations.

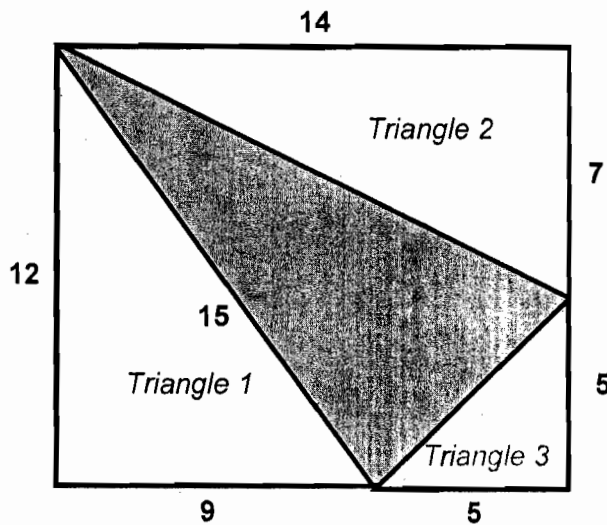
$$\sin \text{ of } C = \frac{4}{5}$$

$$C = 53.1^\circ$$

$$\rightarrow \text{smallest } C = 53.1^\circ$$

53.1°

The diagram on the next page shows the layout of some Hopewell earthworks. The centers of the Newark Octagon, the Newark Square and the Great Circle were at the corners of the shaded triangle.



Not drawn to scale

The three right triangles surrounding the shaded triangle form a rectangle measuring 12 units by 14 units.

Each of these three right triangles is similar to one of the Hopewell triangles on the previous page.

For example, Triangle 3 above is similar to Hopewell Triangle C.

3. Which Hopewell triangle is similar to Triangle 1?

Triangle A

Explain how you decided.

The ratio of the sides of Δ_1 is 3:1,
making them similar.

4. Is the shaded triangle a right triangle?

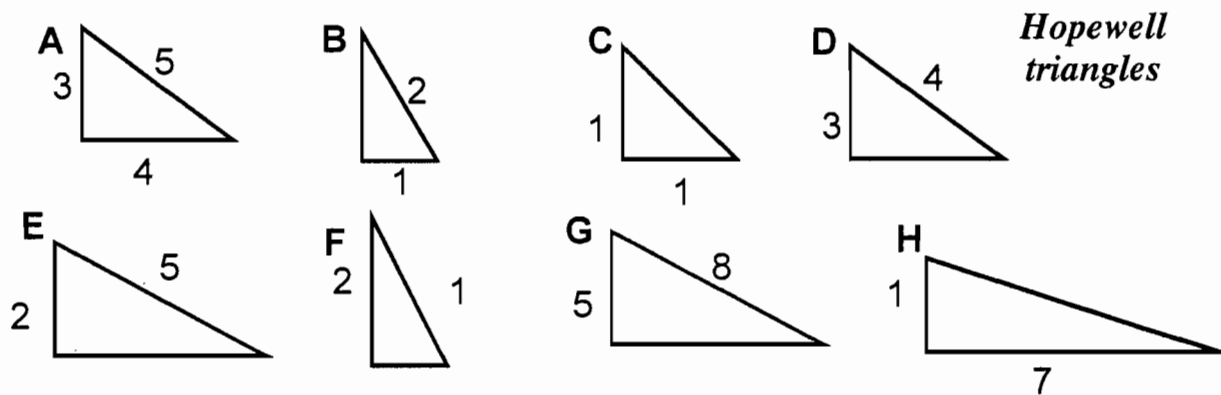
No

Prove your answer.

Δ_3 's hypotenuse = $\sqrt{50}$ Δ_2 's hypotenuse = $\sqrt{245}$ $(\sqrt{245})^2 + (\sqrt{50})^2$
 $\stackrel{?}{=} 15^2 \rightarrow 225 \neq 295$ $15^2 + (\sqrt{50})^2 \stackrel{?}{=} (\sqrt{245})^2 \rightarrow 225 + 50 \neq 295$
No

The Hopewell people were Native Americans whose culture flourished in the central Ohio Valley about 2000 years ago.

The Hopewell people constructed earthworks using right triangles, including those below.



1. What is the length of the hypotenuse of Triangle H?

Give your answer correct to one decimal place.

Show your calculations.

7.1

$$1^2 + 7^2 = c^2$$

$$1 + 49 = c^2$$

$$50 = c^2$$

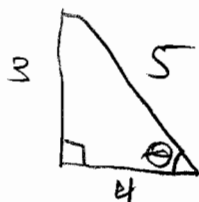
$$c = \sqrt{50} = 7.0710 \rightarrow 7.1$$

2. What is the size of the smallest angle in Triangle A?

Give your answer correct to one decimal place.

Show your calculations.

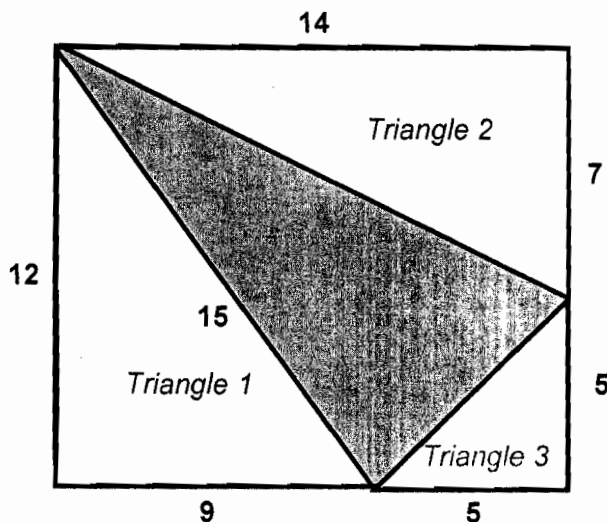
36.9°



$$\sin \theta = \frac{3}{5} = 0.6$$

$$\theta = \sin^{-1}(0.6) = 36.86989765 \rightarrow 36.9^\circ$$

The diagram on the next page shows the layout of some Hopewell earthworks. The centers of the Newark Octagon, the Newark Square and the Great Circle were at the corners of the shaded triangle.



Not drawn to scale

The three right triangles surrounding the shaded triangle form a rectangle measuring 12 units by 14 units.

Each of these three right triangles is similar to one of the Hopewell triangles on the previous page.

For example, Triangle 3 above is similar to Hopewell Triangle C.

3. Which Hopewell triangle is similar to Triangle 1?

A

Explain how you decided.

$$\begin{array}{r} 9, 12, 15 \\ \hline \div 3 \\ \hline 3, 4, 5 \end{array} \quad 3 \times 3 = 9, \quad 4 \times 3 = 12, \quad 5 \times 3 = 15$$

4. Is the shaded triangle a right triangle?

No

Prove your answer.

$$\begin{array}{l} \text{Triangle 3 } 5^2 + 5^2 = c^2 \quad 50 = c^2 \quad c = \sqrt{50} \\ 7^2 + 14^2 = x^2 \quad x^2 = 245 \quad x = \sqrt{245} \\ (\sqrt{245})^2 + (\sqrt{50})^2 = 245 + 50 = 295 \neq 225 \\ (\sqrt{50})^2 + 15^2 = 50 + 225 = 275 \neq (\sqrt{245})^2 \\ 2 + 5 + 50 = 245 \text{ No} \end{array} \quad \begin{array}{l} \text{None of the} \\ \text{combinations} \\ \text{work} \end{array}$$