


Jane's T.V.

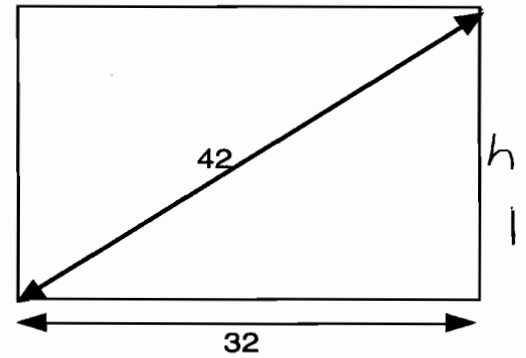
This problem gives you the chance to:

- use Pythagoras' theorem

Jane is hoping to buy a large new television for her den, but she is not sure what size screen will be suitable for her wall. This is because television screens are measured by their diagonal line.



This 42 inch screen measures 32 inches along the base.



1. What is the height of the screen ? 27.2 ✓

Show how you know.

$$\begin{aligned}
 32^2 + h^2 &= 42^2 \\
 1024 + h^2 &= 1764 \\
 h^2 &= 1764 - 1024 \\
 &= 740 \\
 h &= \sqrt{740} \\
 &= 27.2
 \end{aligned}$$

2. What is the area of the screen?

870.4 square inches ✓

$$27.2 \cdot 32 = 870.4$$

3. Jane would like to have a screen 40 inches wide and 32 inches high.

About what size screen will she need to buy?

Show how you figured this out

51 inches ✓

$$\begin{aligned}
 40^2 + 32^2 &= S^2 \\
 1600 + 1024 &= 2624 \\
 S &= \sqrt{2624} \\
 &= 51.2
 \end{aligned}$$



6

Jane's T.V.

This problem gives you the chance to:

- use Pythagoras' theorem

Jane is hoping to buy a large new television for her den, but she is not sure what size screen will be suitable for her wall. This is because television screens are measured by their diagonal line.



This 42 inch screen measures 32 inches along the base.

1. What is the height of the screen?

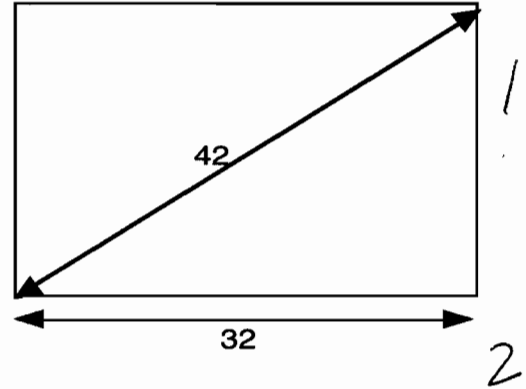
27.2 ✓

Show how you know.

$$32^2 + a^2 = 42^2$$

$$\begin{array}{r} 1024 \quad 1764 \\ -1024 \\ \hline 0740 \end{array}$$

$$\sqrt{740} = 27.2$$



2. What is the area of the screen?

$$32 \cdot 27.2 = 870.4$$

870.4 ✓ square inches

3. Jane would like to have a screen 40 inches wide and 32 inches high.

About what size screen will she need to buy?

Show how you figured this out

1280 X inches 0

$$\begin{array}{r} 40 \\ 32 \\ \hline 80 \\ 1200 \\ \hline 1280 \end{array} \quad \times$$




4

Jane's T.V.

This problem gives you the chance to:

- use Pythagoras' theorem

Jane is hoping to buy a large new television for her den, but she is not sure what size screen will be suitable for her wall. This is because television screens are measured by their diagonal line.



This 42 inch screen measures 32 inches along the base.

1. What is the height of the screen? 27.22 ✓

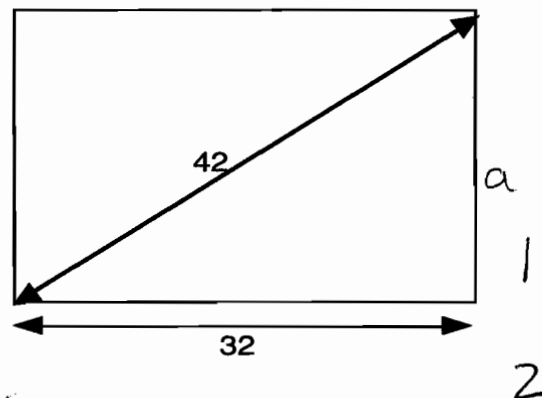
Show how you know.

$$a^2 + b^2 = c^2$$

$$32^2 + b^2 = 42^2$$

$$42^2 - 32^2 = b^2$$

$$1764 - 1024 = 740 \checkmark$$



$$\sqrt{740} \checkmark$$

2. What is the area of the screen? 100.53 square inches 0

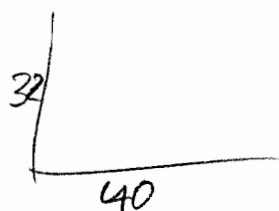
$$32 \times 27.22$$

3. Jane would like to have a screen 40 inches wide and 32 inches high.

About what size screen will she need to buy?

Show how you figured this out

$$\frac{51.2}{51} \text{ inches } 1$$



$$40^2 + 32^2 =$$

$$1600 \quad 1024$$

$$2624$$


$$51.2 \checkmark$$



Jane's T.V.

This problem gives you the chance to:
• use Pythagoras' theorem

Jane is hoping to buy a large new television for her den, but she is not sure what size screen will be suitable for her wall. This is because television screens are measured by their diagonal line.

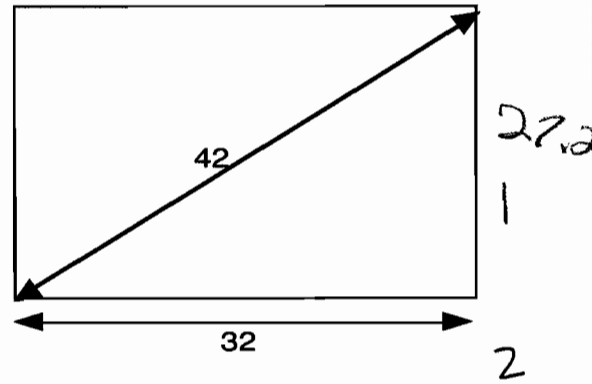


This 42 inch screen measures 32 inches along the base.

1. What is the height of the screen? 27.2 ✓

Show how you know.

$$\begin{aligned} 32^2 + b &= 42^2 \\ 1024 + b &= 1764 \\ \sqrt{740} & \\ 3.14 & \end{aligned}$$



2. What is the area of the screen? 85.408 square inches 0

$$3.14 \times 27.2 =$$

3. Jane would like to have a screen 40 inches wide and 32 inches high. About what size screen will she need to buy? Show how you figured this out

$$\frac{12861.44}{x} \text{ inches } 0$$


$$3.14 (32^2) \times 4$$



Jane's T.V.

This problem gives you the chance to:
• use Pythagoras' theorem


Jane is hoping to buy a large new television for her den, but she is not sure what size screen will be suitable for her wall. This is because television screens are measured by their diagonal line.



This 42 inch screen measures 32 inches along the base.

1. What is the height of the screen? 27.20 ✓

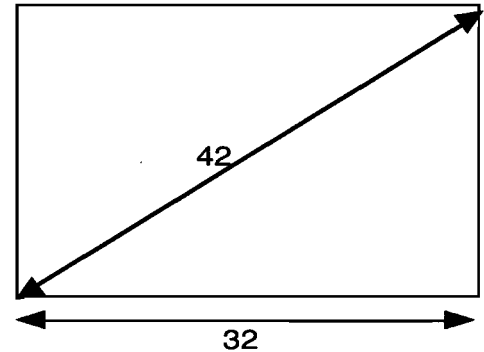
Show how you know.



$$a^2 + b^2 = c^2$$

$$b^2 = 27.20 \checkmark$$

$$32^2 + b^2 = 42^2 \checkmark$$



2. What is the area of the screen?

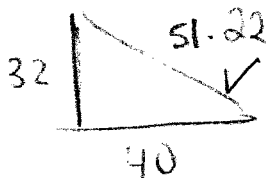
$$42^2 = 1764 \times$$

1764 ^x square inches

3. Jane would like to have a screen 40 inches wide and 32 inches high. About what size screen will she need to buy?

Show how you figured this out

2624 inches



$$32^2 + 40^2 = c^2$$

$$c^2 = 2624 \checkmark$$

$$c = 51.22 \checkmark$$

4




Jane's T.V.

This problem gives you the chance to:

- use Pythagoras' theorem

Jane is hoping to buy a large new television for her den, but she is not sure what size screen will be suitable for her wall. This is because television screens are measured by their diagonal line.



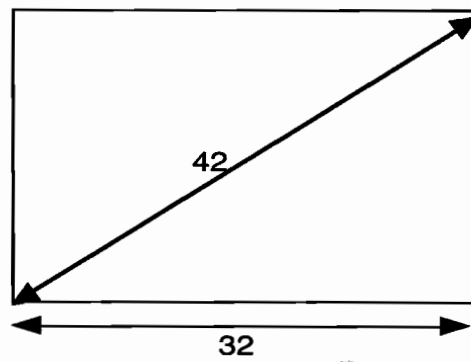
This 42 inch screen measures 32 inches along the base.

1. What is the height of the screen?

$$\sqrt{740} = a$$

Show how you know.

I wrote the equation but I added a variable for the height. I did the opposite and came with 740.



2. What is the area of the screen?

$$870.49 \text{ square inches}$$

~~$$42^2 = a^2 + \sqrt{740}^2$$~~


$$32 \times \sqrt{740}$$

3. Jane would like to have a screen 40 inches wide and 32 inches high.

About what size screen will she need to buy?

$$51 \text{ inches}$$

Show how you figured this out



$$32^2 + 40^2 =$$

$$1024 + 1600 = 2624$$

$$\sqrt{2624}$$

(6)




Jane's T.V.

This problem gives you the chance to:

- use Pythagoras' theorem

Jane is hoping to buy a large new television for her den, but she is not sure what size screen will be suitable for her wall. This is because television screens are measured by their diagonal line.

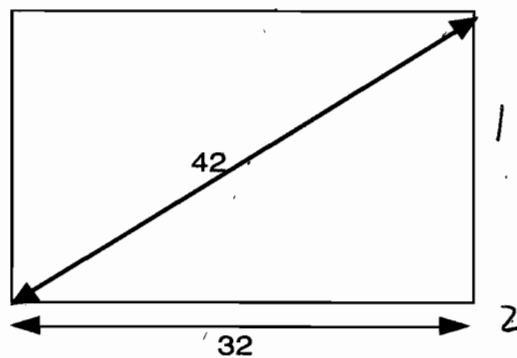


This 42 inch screen measures 32 inches along the base.

1. What is the height of the screen? 27.2 ✓

Show how you know.

$$42^2 - 32^2 = 740 \quad \sqrt{740} = 27.2$$



2. What is the area of the screen?

807 * square inches 0

3. Jane would like to have a screen 40 inches wide and 32 inches high.

About what size screen will she need to buy?

Show how you figured this out

51 inches 1



4

Jane's T.V.

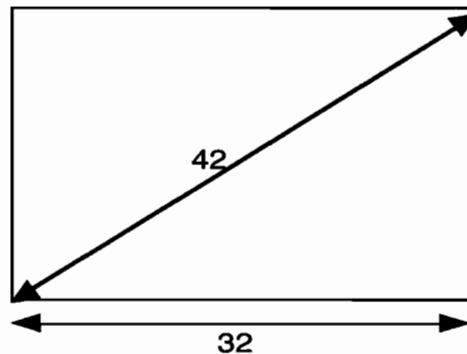
This problem gives you the chance to:

- use Pythagoras' theorem

Jane is hoping to buy a large new television for her den, but she is not sure what size screen will be suitable for her wall. This is because television screens are measured by their diagonal line.



This 42 inch screen measures 32 inches along the base.



1. What is the height of the screen? 27.2 ins ✓

Show how you know.

$$h^2 = 42^2 - 32^2$$

$$= 740$$

2. What is the area of the screen? 870.4 square inches ✓

$$32 \times 27.2$$

3. Jane would like to have a screen 40 inches wide and 32 inches high.

About what size screen will she need to buy?

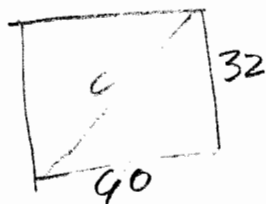
Show how you figured this out

51 inches ✓

$$32^2 + 40^2 = c^2$$

$$2624$$

$$51.22$$




Jane's T.V.

This problem gives you the chance to:

- use Pythagoras' theorem

Jane is hoping to buy a large new television for her den, but she is not sure what size screen will be suitable for her wall. This is because television screens are measured by their diagonal line.



This 42 inch screen measures 32 inches along the base.

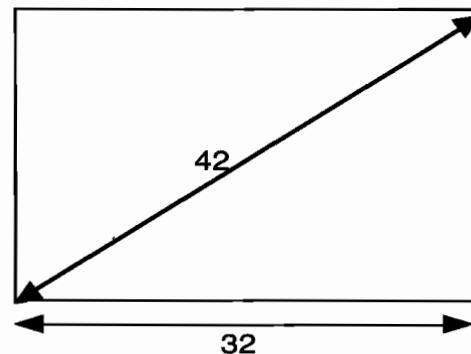
1. What is the height of the screen? about 27.2 ✓

Show how you know.

$$42^2 = 1764$$

$$32^2 = 1024$$

$$740 \checkmark$$



~~32 x 27~~

2. What is the area of the screen?

2187.54 square inches

$$3.14 \times 16 \cdot 16 \times 27.2 = 21875.54$$

$$A = \pi \cdot r \cdot r \cdot h$$

3. Jane would like to have a screen 40 inches wide and 32 inches high.

About what size screen will she need to buy?

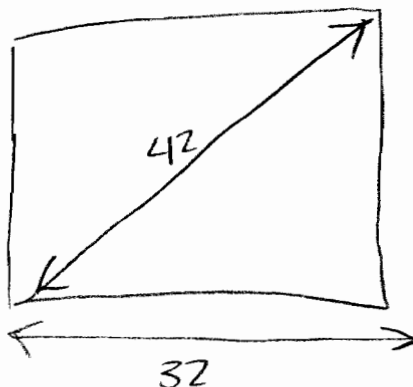
26.24 inches

Show how you figured this out

$$40^2 = 1600 \checkmark$$

$$32^2 = 1024 \checkmark$$

1



3



Jane's T.V.

This problem gives you the chance to:

- use Pythagoras' theorem

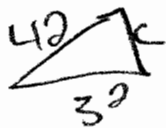
Jane is hoping to buy a large new television for her den, but she is not sure what size screen will be suitable for her wall. This is because television screens are measured by their diagonal line.



This 42 inch screen measures 32 inches along the base.

1. What is the height of the screen? 10 in. x

Show how you know.



$$32^2 = 10^2$$

$$c^2 - a^2 = b^2 \quad 42^2 - 32^2 = 10^2$$

$$42^2 - 32^2 = 10^2 \checkmark$$

2. What is the area of the screen?

$$32 \times 10 = 320$$

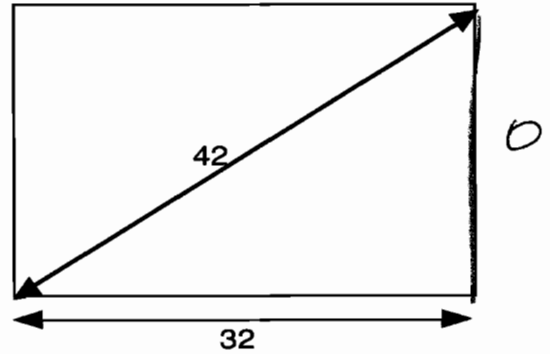
3. Jane would like to have a screen 40 inches wide and 32 inches high.

About what size screen will she need to buy?

Show how you figured this out



$$40 + 40 + 32 + 32 = 144 \text{ x}$$



320 square inches

144 inches




Jane's T.V.

This problem gives you the chance to:

- use Pythagoras' theorem

Jane is hoping to buy a large new television for her den, but she is not sure what size screen will be suitable for her wall. This is because television screens are measured by their diagonal line.



This 42 inch screen measures 32 inches along the base.

1. What is the height of the screen?

$$b = \sqrt{1740}$$

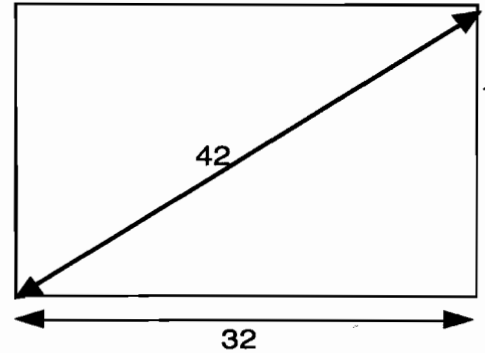
$$27.2$$

✓

Show how you know.

$$32^2 + c = 42^2$$

$$1024 + b = 1764$$



2. What is the area of the screen?

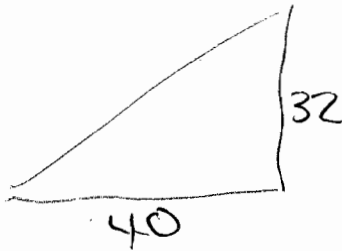
$$\underline{300}^x \text{ square inches}$$

3. Jane would like to have a screen 40 inches wide and 32 inches high.

About what size screen will she need to buy?

Show how you figured this out

$$\underline{\sqrt{2624}}^{\checkmark} \text{ inches}$$



$$32^2 + 40^2 = c^2$$

$$1024 + 1600 = c^2$$



Jane's T.V.

This problem gives you the chance to:

- use Pythagoras' theorem

Jane is hoping to buy a large new television for her den, but she is not sure what size screen will be suitable for her wall. This is because television screens are measured by their diagonal line.



This 42 inch screen measures 32 inches along the base.

1. What is the height of the screen? 27.2 ✓

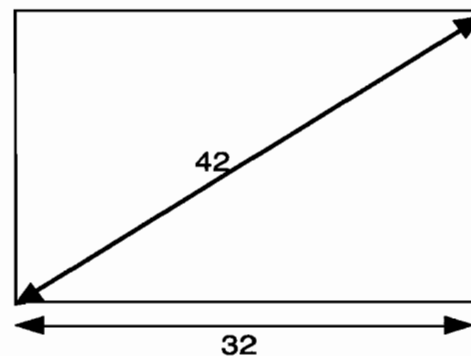
Show how you know.

$$a^2 + b^2 = c^2$$

$$32^2 + a^2 = 42^2$$

$$a^2 = 8704 - 1024$$

$$a = \sqrt{704}$$



2. What is the area of the screen? 1344 square inches 0

$$32 \cdot 42 =$$

3. Jane would like to have a screen 40 inches wide and 32 inches high.

About what size screen will she need to buy?

Show how you figured this out

$$32^2 + 40^2 =$$

$$\sqrt{2624}$$

51 inches ✓



(4)

Jane's T.V.

This problem gives you the chance to:

- use Pythagoras' theorem

Jane is hoping to buy a large new television for her den, but she is not sure what size screen will be suitable for her wall. This is because television screens are measured by their diagonal line.



This 42 inch screen measures 32 inches along the base.

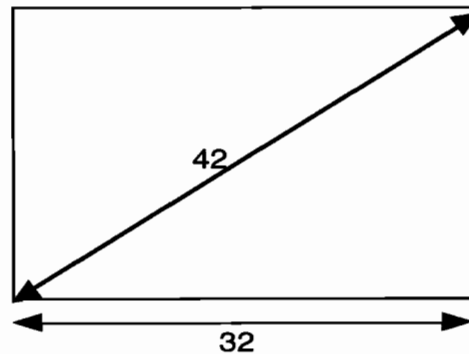
1. What is the height of the screen? 53 in x

Show how you know.

$$42^2 + 32^2 = c^2$$

$$1764 + 1024 = c^2$$

$$c = 2788 \quad \sqrt{2788} = 52.8 \text{ or } 53$$



2. What is the area of the screen?

$$32 \times 53$$

1696 ✓ square inches #1

3. Jane would like to have a screen 40 inches wide and 32 inches high.

About what size screen will she need to buy?

Show how you figured this out

24 x inches 0

$$32^2 + b^2 = 40^2$$

$$1024 + b^2 = 1600$$

$$\begin{array}{r} 1024 + b^2 = 1600 \\ -1024 \\ \hline b^2 = 576 \\ \sqrt{576} = 24 \end{array}$$

$$32 + 24^2 = 40^2$$

$$1024 + 576 = 1600 \checkmark$$



Jane's T.V.

This problem gives you the chance to:

- use Pythagoras' theorem

Jane is hoping to buy a large new television for her den, but she is not sure what size screen will be suitable for her wall. This is because television screens are measured by their diagonal line.

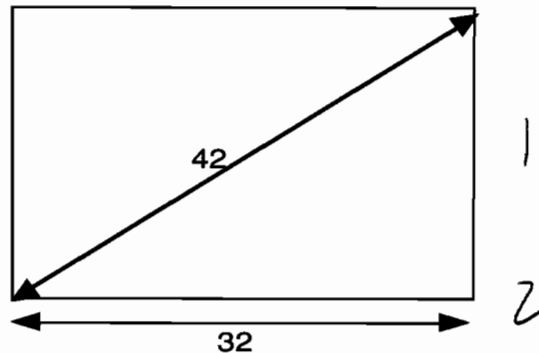


This 42 inch screen measures 32 inches along the base.

1. What is the height of the screen? 27.2 ✓

Show how you know.

$$42^2 - 32^2 = 740 \quad /$$



2. What is the area of the screen?

870.4 square inches |

$$32 \cdot 27.2$$

3. Jane would like to have a screen 40 inches wide and 32 inches high.

About what size screen will she need to buy?

Show how you figured this out

$$40^2 + 32^2 = 2624 \quad \wedge$$

_____ inches ^x 0

0




Jane's T.V.

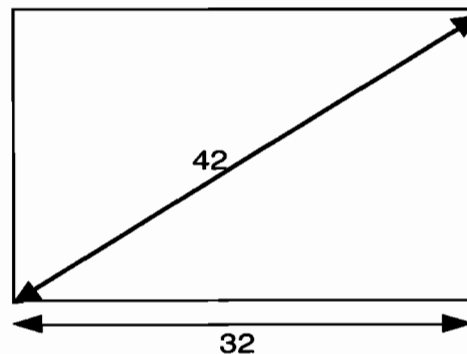
This problem gives you the chance to:

- use Pythagoras' theorem

Jane is hoping to buy a large new television for her den, but she is not sure what size screen will be suitable for her wall. This is because television screens are measured by their diagonal line.



This 42 inch screen measures 32 inches along the base.



1. What is the height of the screen? 27.20 ✓

Show how you know.

$$\begin{aligned}
 a^2 + 32^2 &= 42^2 \quad \checkmark \\
 a^2 + 1024 &= 1764 \\
 a^2 &= 740 \\
 \sqrt{740} & \quad \checkmark
 \end{aligned}$$

2. What is the area of the screen?

870.4 square inches 1

$$27.20 \cdot 32 \quad \checkmark$$

3. Jane would like to have a screen 40 inches wide and 32 inches high.

About what size screen will she need to buy?

Show how you figured this out

51.22 inches 1
 ≈ 51

$$\begin{aligned}
 40^2 + 32^2 &= c^2 \quad \checkmark \\
 1600 + 1024 &= c^2 \\
 &= 2624 \\
 \sqrt{2624} &= 51.22 \quad \checkmark
 \end{aligned}$$

